



Consider the following functions.

$$a(x) = \frac{x-4}{x+4}$$

$$b(x) = \frac{x^2-4}{x^2+4}$$

$$c(x) = \frac{x+4}{x^2-4}$$

$$d(x) = \frac{x+2}{x^2-4}$$

$$e(x) = \frac{x^2+4}{x+4}$$

$$= \frac{x+4}{(x-2)(x+2)}$$

$$= \frac{x+2}{(x-2)(x+2)}$$

$$= \frac{1}{x-2}, x \neq -2$$

$$f(x) = \frac{x^2+4}{x^2-4}$$

$$g(x) = \frac{-x-4}{-x^2-4}$$

$$h(x) = \frac{-x^2-4}{-x^2+4}$$

$$i(x) = \frac{x^2-4}{x+2}$$

$$j(x) = \frac{x^3-4x^2}{x^2-2x}$$

$$= \frac{x^2+4}{(x-2)(x+2)}$$

$$= \frac{-(x+4)}{-(x^2+4)}$$

$$= \frac{-(x^2+4)}{-(x^2-4)}$$

$$= \frac{(x-2)(x+2)}{x+2}$$

$$= \frac{x^2(x-4)}{x(x-2)}$$

$$= \frac{x+4}{x^2+4}$$

$$= \frac{x^2+4}{(x-2)(x+2)}$$

$$= x-2, x \neq -2$$

$$= \frac{x(x-4)}{x-2}, x \neq 0, 2$$

Without sketching the graph of the function, determine which functions have

- a) no discontinuities b, g
- b) no vertical asymptote b, g, i
- c) no horizontal asymptote e, i, j
- d) the x-axis as a horizontal asymptote c, d, g
- e) a horizontal asymptote with equation $y = 1$ a, b, f, h
- f) point(s) of discontinuity d, i, j



Algebraically determine the equations of any asymptotes and the coordinates of any point(s) of discontinuity on the graph of the function $f(x) = \frac{(2x-1)(x-5)}{x^2-2x-15}$.

State the domain and range of f .

$$f(x) = \frac{(2x-1)(x-5)}{(x+3)(x-5)} = \frac{2x^2-11x+5}{x^2-2x-15}$$

$$= \frac{2x-1}{x+3}, x \neq 5$$

$$\text{when } x = 5, \frac{2x-1}{x+3} = \frac{2(5)-1}{5+3} = \frac{9}{8}$$

vertical asymptote $x = -3$

horizontal asymptote $y = 2$

point of discontinuity $(5, \frac{9}{8})$

domain $\{x \mid x \neq -3, 5, x \in \mathbb{R}\}$

range $\{y \mid y \neq \frac{9}{8}, 2, y \in \mathbb{R}\}$

Complete Assignment Questions #1 - #5

Assignment

1. For each of the graphs of the following rational functions, algebraically determine the equation of any asymptotes and the coordinates of any points of discontinuity.

$$a) f(x) = \frac{2(x+1)}{x^2+1} = \frac{2x+2}{x^2+1}$$

horizontal asymptote $y = 0$

$$b) g(x) = -\frac{4x^3}{x^3+1} \quad \begin{array}{l} x^3+1=0 \\ x=-1 \end{array}$$

horizontal asymptote $y = -4$

vertical asymptote $x = -1$

$$c) h(x) = \frac{3-x^4}{3x^4+6}$$

horizontal asymptote $y = -\frac{1}{3}$

$$d) k(x) = \frac{x+4}{x^2+5x+4} = \frac{x+4}{(x+1)(x+4)}$$

$$\left(\frac{1}{-4+1} = -\frac{1}{3} \right) = \frac{1}{x+1} \quad x \neq -4$$

horizontal asymptote $y = 0$

vertical asymptote $x = -1$

point of discontinuity $(-4, -\frac{1}{3})$

$$e) f(x) = \frac{2(3x-1)(x+4)}{3x^2+4x+1}$$

$$\begin{aligned} & 3x^2+4x+1 & 2(3x-1)(x+4) \\ = & 3x^2+3x+x+1 & = 2(3x^2+11x-4) \\ = & 3x(x+1)+1(x+1) & = 6x^2+22x-8 \\ = & (x+1)(3x+1) & \end{aligned}$$

$$f(x) = \frac{2(3x-1)(x+4)}{(x+1)(3x+1)} \quad \text{or} \quad \frac{6x^2+22x-8}{3x^2+4x+1}$$

horizontal asymptote $y = 2$

vertical asymptotes $x = -1$
 $x = -\frac{1}{3}$

$$f) f(x) = \frac{2(3x-1)(x+4)}{3x^2+10x-8}$$

$$\begin{aligned} & 3x^2+10x-8 \\ = & 3x^2-2x+12x-8 \\ = & x(3x-2)+4(3x-2) \\ = & (3x-2)(x+4) \end{aligned}$$

$$f(x) = \frac{2(3x-1)(x+4)}{(3x-2)(x+4)} = \frac{2(3x-1)}{3x-2} \quad x \neq -4$$

$$\text{or } f(x) = \frac{6x^2+22x-8}{3x^2+10x-8}$$

$$\text{if } x = -4, \frac{2(3x-1)}{3x-2} = \frac{2(-13)}{-14} = \frac{13}{7}$$

horizontal asymptote $y = 2$

vertical asymptote $x = \frac{2}{3}$

point of discontinuity $(-4, \frac{13}{7})$

2. Consider the functions $f(x) = x^2 - 9$ and $g(x) = 9x - x^3$.

a) Express $f(x)$ and $g(x)$ in factored form.

$$f(x) = x^2 - 9 = (x-3)(x+3)$$

$$g(x) = 9x - x^3 = x(9 - x^2) = x(3-x)(3+x)$$

b) Express the function $\left(\frac{f}{g}\right)(x)$ in simplest form.

$$\left(\frac{f}{g}\right)(x) = \frac{x^2 - 9}{9x - x^3} = \frac{(x-3)(x+3)}{x(3-x)(3+x)} = \underline{\underline{-\frac{1}{x}, x \neq \pm 3}}$$

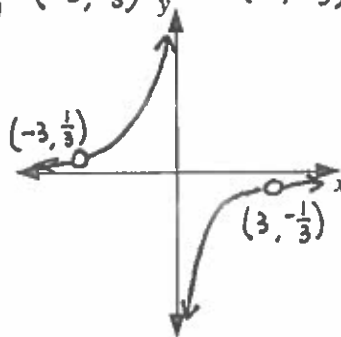
c) Algebraically determine the equation of any asymptotes and the coordinates of any points of discontinuity on the graph of $y = \left(\frac{f}{g}\right)(x)$.

$$\text{If } x = -3, \quad -\frac{1}{x} = -\frac{1}{-3} = \frac{1}{3} \quad \text{horizontal asymptote } y = 0$$

$$\text{If } x = 3, \quad -\frac{1}{x} = -\frac{1}{3} \quad \text{vertical asymptote } x = 0$$

points of discontinuity $(-3, \frac{1}{3})$ and $(3, -\frac{1}{3})$

d) Sketch a graph of $y = \left(\frac{f}{g}\right)(x)$ on the grid illustrating the features in c).



e) Determine the domain and range of the function $\left(\frac{f}{g}\right)(x)$.

$$\text{domain } \{x \mid x \neq 0, \pm 3, x \in \mathbb{R}\}$$

$$\text{range } \{y \mid y \neq 0, \pm \frac{1}{3}, y \in \mathbb{R}\}$$

3. Consider the functions $f(x) = \frac{3}{x+2}$ and $g(x) = x - 2$.

a) Show that $(g \circ f)(x) = \frac{-2x-1}{x+2}$.

$$(g \circ f)(x) = g\left(\frac{3}{x+2}\right) = \frac{3}{x+2} - 2 = \frac{3}{x+2} - \frac{2(x+2)}{x+2} = \frac{3 - 2(x+2)}{x+2}$$

$$= \frac{3 - 2x - 4}{x+2} = \underline{\underline{\frac{-2x-1}{x+2}}}$$

b) Determine the equations of the asymptotes of the graph of $y = (g \circ f)(x)$.

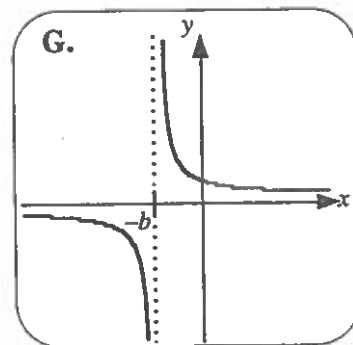
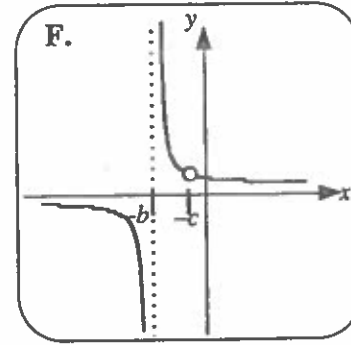
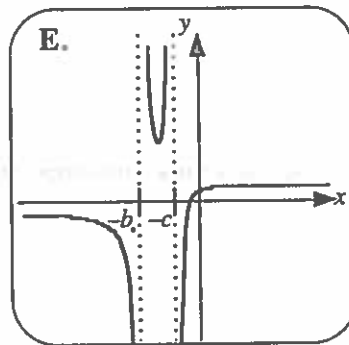
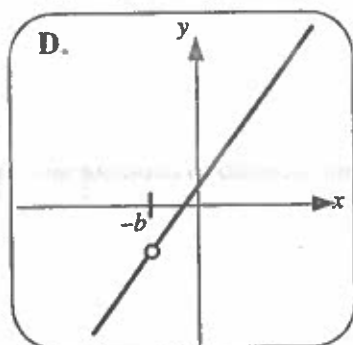
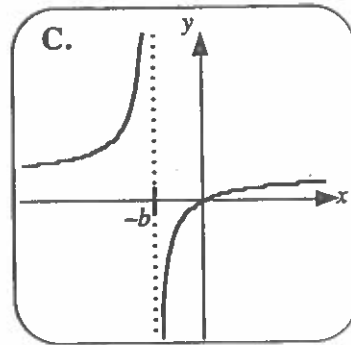
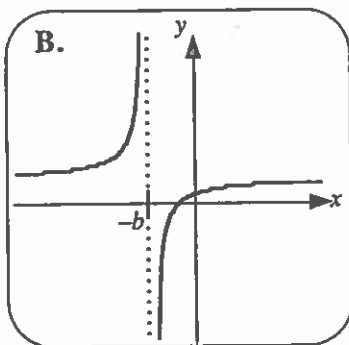
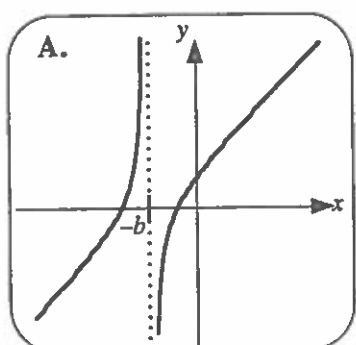
$$\text{horizontal asymptote } y = -2 \quad \text{vertical asymptote } x = -2$$

c) State the domain and range of the function $(g \circ f)(x)$.

$$\text{domain } \{x \mid x \neq -2, x \in \mathbb{R}\} \quad \text{range } \{y \mid y \neq -2, y \in \mathbb{R}\}$$

4. The equations of seven rational functions and the graphs of these functions are shown. If $a, b,$ and c are distinct natural numbers, match the set of rational functions to their graphs and explain the reasoning.

Function 1 $y = \frac{1}{x+b}$	Function 2 $y = \frac{x}{x+b}$	Function 3 $y = \frac{x+a}{x+b}$	Function 4 $y = \frac{(x+a)(x+c)}{x+b}$
Function 5 $y = \frac{(x+a)(x+b)}{x+b}$	Function 6 $y = \frac{x+a}{(x+b)(x+c)}$	Function 7 $y = \frac{x+c}{(x+b)(x+c)}$	



$1 \rightarrow G$ $5 \rightarrow D$
 $2 \rightarrow C$ $6 \rightarrow E$
 $3 \rightarrow B$ $7 \rightarrow F$
 $4 \rightarrow A$

Function 1 has a vertical asymptote $x = -b$ and a horizontal asymptote $y = 0$, so $1 \rightarrow G$.

Functions 2 and 3 have a vertical asymptote $x = -b$ and a horizontal asymptote $y = 1$. Function 2 passes through the origin and Function 3 does not, so $2 \rightarrow C$ and $3 \rightarrow B$.

Functions 4 and 5 have no horizontal asymptotes. Function 4 has a vertical asymptote $x = -b$ and Function 5 has a point of discontinuity at $x = -b$, so $4 \rightarrow A$ and $5 \rightarrow D$.

Functions 6 and 7 have two discontinuities. Function 6 has two vertical asymptotes, so $6 \rightarrow E$. Function 7 has one vertical asymptote and one point of discontinuity, so $7 \rightarrow F$.

Multiple
Choice5. Which of the following functions has a point of discontinuity at (p, q) ?

A. $y = \frac{(x-p)(x-q)}{x-p} = x-q, x \neq p$ If $x = p, y = p-q$

B. $y = \frac{(x-p)(x-q)}{x-q} = x-p, x \neq q$

C. $y = \frac{(x-p)(x-p+q)}{x-p} = x-p+q, x \neq p$ If $x = p, y = p-p+q = q$

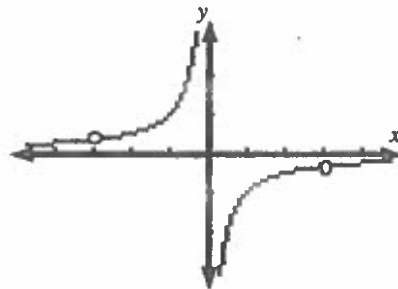
D. $y = \frac{(x-q)(x+p-q)}{x-q} = x+p-q, x \neq q$

Answer Key1. a) horizontal asymptote $y = 0$. b) vertical asymptote $x = -1$, horizontal asymptote $y = -4$
c) horizontal asymptote $y = -\frac{1}{3}$ d) vertical asymptote $x = -1$, horizontal asymptote $y = 0$, point of discontinuity $(-4, -\frac{1}{3})$.e) vertical asymptote $x = -1, x = -\frac{1}{3}$, horizontal asymptote $y = 2$.f) vertical asymptote $x = \frac{2}{3}$, horizontal asymptote $y = 2$, point of discontinuity $(-4, \frac{13}{7})$.2. a) $f(x) = (x-3)(x+3), g(x) = x(3-x)(3+x)$

b) $\left(\frac{f}{g}\right)(x) = -\frac{1}{x}, x \neq \pm 3$

c) vertical asymptote $x = 0$, horizontal asymptote $y = 0$,
points of discontinuity $(-3, \frac{1}{3}), (3, -\frac{1}{3})$.

d) See graph at side.

e) Domain: $\{x \mid x \neq 0, \pm 3, x \in R\}$ Range: $\{y \mid y \neq 0, \pm \frac{1}{3}, y \in R\}$ 3. b) vertical asymptote $x = -2$, horizontal asymptote $y = -2$ c) Domain: $\{x \mid x \neq -2, x \in R\}$ Range: $\{y \mid y \neq -2, y \in R\}$ 4. Function 1 \rightarrow G, Function 2 \rightarrow C, Function 3 \rightarrow B, Function 4 \rightarrow A,
Function 5 \rightarrow D, Function 6 \rightarrow E, Function 7 \rightarrow F.• Function 1 has a vertical asymptote $x = -b$ and a horizontal asymptote $y = 0$, so Function 1 \rightarrow G.• Functions 2 and 3 have a vertical asymptote $x = -b$ and a horizontal asymptote $y = 1$. Function 2 passes through the origin and Function 3 does not, so Function 2 \rightarrow C and Function 3 \rightarrow B.• Functions 4 and 5 have no horizontal asymptotes. Function 4 has a vertical asymptote $x = -b$, and Function 5 has a point of discontinuity at $x = -b$, so Function 4 \rightarrow A and Function 5 \rightarrow D.• Functions 6 and 7 have two discontinuities. Function 6 has two vertical asymptotes, so Function 6 \rightarrow E. Function 7 has one vertical asymptote and one point of discontinuity, so Function 7 \rightarrow F.

5. C